




These Rabbits are missing their ears. Draw two ears each and count them to finish the table of 2!

$2 \times 1 =$




$2 \times 2 =$



$2 \times 3 =$



$2 \times 4 =$



$2 \times 5 =$




This space to write down the table of 2 from memory.




These Rabbits are missing their ears. Draw two ears each and count them to finish the table of 2!


$2 \times 6 = \square$




$2 \times 7 = \square$



$2 \times 8 = \square$



$2 \times 9 = \square$



$2 \times 10 = \square$

